

MA 137 – Calculus 1 with Life Science
Applications
**The Sandwich Theorem
and Some Trigonometric Limits**
(Section 3.4)

Alberto Corso

(alberto.corso@uky.edu)

Department of Mathematics
University of Kentucky

October 2, 2017

1/20

The Sandwich (Squeeze) Theorem

Suppose we want to calculate $\lim_{x \rightarrow \infty} e^{-x} \cos(10x)$.

We soon realize that none of the rules we have learned so far apply. Although $\lim_{x \rightarrow \infty} e^{-x} = 0$, we find that $\lim_{x \rightarrow \infty} \cos(10x)$ does not exist as the function $\cos(10x)$ oscillates between -1 and 1 .

We need to employ some other techniques. One of these techniques is to use the Squeeze (Sandwich) Theorem.

Sandwich (Squeeze) Theorem

Consider three functions $f(x)$, $g(x)$ and $h(x)$ and suppose for all x in an open interval that contains c (except possibly at c) we have

$$f(x) \leq g(x) \leq h(x).$$

If $\lim_{x \rightarrow c} f(x) = L = \lim_{x \rightarrow c} h(x)$ then $\lim_{x \rightarrow c} g(x) = L$.

2/20

From the inequality

$$-1 \leq \cos(10x) \leq 1$$

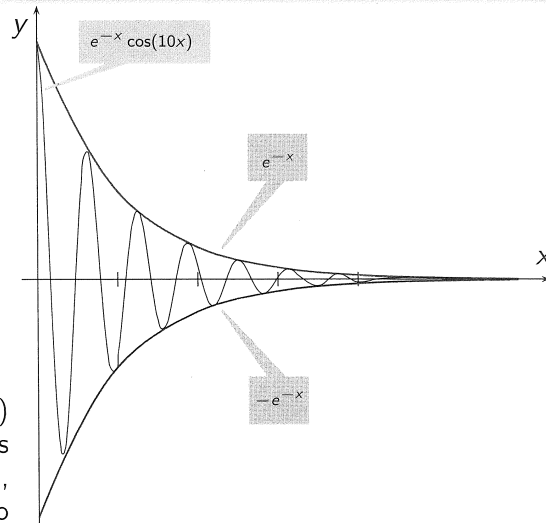
it follows that (as $e^{-x} > 0$, always)

$$-e^{-x} \leq e^{-x} \cos(10x) \leq e^{-x}$$

Then, since

$$\lim_{x \rightarrow \infty} (-e^{-x}) = 0 = \lim_{x \rightarrow \infty} e^{-x}$$

our function $g(x) = e^{-x} \cos(10x)$ is squeezed between the functions $f(x) = -e^{-x}$ and $h(x) = e^{-x}$, which both go to 0 as x tends to infinity.



So by the Squeeze Theorem it follows that

$$\lim_{x \rightarrow \infty} e^{-x} \cos(10x) = 0.$$

3/20

Example 1: (Online Homework HW10, # 2)

Suppose $-8x - 22 \leq f(x) \leq x^2 - 2x - 13$.

Use this to compute $\lim_{x \rightarrow -3} f(x)$.

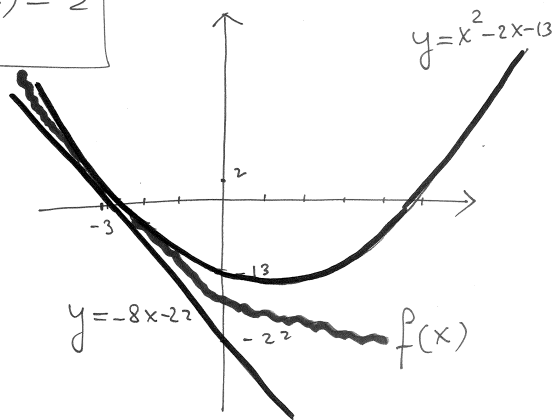
4/20

Note that $\lim_{x \rightarrow -3} (-8x - 22) \stackrel{\text{substitution theorem}}{=} -8(-3) - 22 = 2$

Moreover $\lim_{x \rightarrow -3} (x^2 - 2x - 13) = (-3)^2 - 2(-3) - 13 = 2$

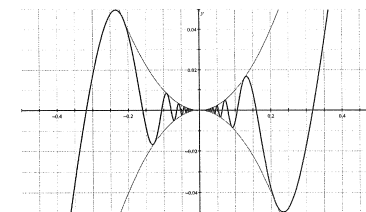
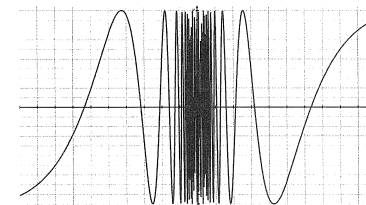
Hence by the sandwich (Squeeze) Theorem

$$\lim_{x \rightarrow -3} f(x) = 2$$



Example 2: (Neuhauser, Example # 1, p. 114)

Find $\lim_{x \rightarrow 0} x^2 \sin\left(\frac{1}{x}\right)$.



Note that for all x : $-1 \leq \sin\left(\frac{1}{x}\right) \leq 1$.

Multiply everywhere by $x^2 \geq 0$ and the inequalities do not change:

$$\underline{\underline{-x^2}} \leq x^2 \sin\left(\frac{1}{x}\right) \leq \underline{\underline{x^2}}$$

Now $\lim_{x \rightarrow 0} -x^2 = 0 = \lim_{x \rightarrow 0} x^2$

Hence by the sandwich Theorem we conclude

$$\lim_{x \rightarrow 0} x^2 \sin\left(\frac{1}{x}\right) = 0$$

See the pictures on previous page!

Fundamental Trigonometric Limits

The following two trigonometric limits are important for developing the differential calculus for trigonometric functions:

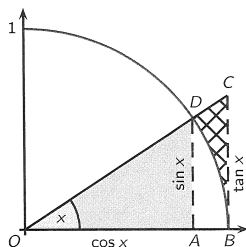
$$\lim_{x \rightarrow 0} \frac{\sin x}{x} = 1$$

$$\lim_{x \rightarrow 0} \frac{1 - \cos x}{x} = 0$$

- Note that the angle x is measured in radians.
- We will prove both statements.
- The proof of the first statement uses a nice geometric argument and the sandwich theorem.
- The second statement follows from the first.

Proof that $\lim_{x \rightarrow 0} \frac{\sin x}{x} = 1$

- Since we are interested in the limit as $x \rightarrow 0$, we can restrict the values of x to values close to 0.
- We split the proof into two cases, one in which $0 < x < \pi/2$, the other in which $-\pi/2 < x < 0$.
- Since $f(x) = \sin x/x$ is an even function (indeed, it is the quotient of two odd functions!) we only need to study the case $0 < x < \pi/2$.



In this case, both x and $\sin x$ are positive.

We draw the unit circle together with the triangles OAD and OBC . The angle x is measured in radians. Since $\overline{OB} = 1$, we find that

$$\text{arc length of } BD = x \quad \overline{OA} = \cos x \quad \overline{AD} = \sin x \quad \overline{BC} = \tan x.$$

Furthermore the picture illustrates that

$$\text{area of } OAD \leq \text{area of sector } OBD \leq \text{area of } OBC$$

7/20

The area of a sector of central angle x (in radians) and radius r is $\frac{1}{2}r^2x$.

Therefore, $\frac{1}{2} \cos x \cdot \sin x \leq \frac{1}{2} \cdot 1^2 \cdot x \leq \frac{1}{2} \cdot 1 \cdot \tan x$.

Dividing this pair of inequalities by $1/2 \sin x$ yields

$$\cos x \leq \frac{x}{\sin x} \leq \frac{1}{\cos x}.$$

Solving now for $\sin x/x$ we obtain

$$\cos x \leq \frac{\sin x}{x} \leq \frac{1}{\cos x}.$$

We can now take the limit as $x \rightarrow 0^+$ and find that

$$\lim_{x \rightarrow 0^+} \cos x = 1 \quad \lim_{x \rightarrow 0^+} \frac{1}{\cos x} = 1.$$

Finally the Sandwich Theorem yields $\lim_{x \rightarrow 0^+} \frac{\sin x}{x} = 1$.

By symmetry we also have that $\lim_{x \rightarrow 0^-} \frac{\sin x}{x} = 1$.

8/20

Proof that $\lim_{x \rightarrow 0} \frac{1 - \cos x}{x} = 0$

Multiplying both numerator and denominator of $f(x) = (1 - \cos x)/x$ by $1 + \cos x$, we can reduce the second statement to the first:

$$\begin{aligned} \lim_{x \rightarrow 0} \frac{1 - \cos x}{x} &= \lim_{x \rightarrow 0} \frac{1 - \cos x}{x} \cdot \frac{1 + \cos x}{1 + \cos x} \\ &= \lim_{x \rightarrow 0} \frac{1 - \cos^2 x}{x(1 + \cos x)} \\ &= \lim_{x \rightarrow 0} \frac{\sin^2 x}{x(1 + \cos x)} \\ &= \lim_{x \rightarrow 0} \frac{\sin x}{x} \cdot \lim_{x \rightarrow 0} \frac{\sin x}{1 + \cos x} \\ &= 1 \cdot 0 = 0 \end{aligned}$$

9/20

Example 3: (Online Homework HW10, # 7)

Evaluate $\lim_{\theta \rightarrow 0} \frac{\sin(4\theta) \sin(8\theta)}{\theta^2}$.

10/20

Using a different letter we have

$$\lim_{u \rightarrow 0} \frac{\sin(u)}{u} = 1$$

Hence we can rewrite our limit as:

$$\lim_{\theta \rightarrow 0} \frac{\sin(4\theta) \sin(8\theta)}{\theta^2} = \lim_{\theta \rightarrow 0} \left[\frac{\sin(4\theta)}{\theta} \right] \left[\frac{\sin(8\theta)}{\theta} \right]$$

We need to have both terms of the form $\frac{\sin(u)}{u}$

Hence we adjust as follows:

$$\begin{aligned} \lim_{\theta \rightarrow 0} \left[\frac{\sin(4\theta)}{4\theta} \right] \left[\frac{\sin(8\theta)}{8\theta} \right] \cdot 32 &= \\ &= 32 \left[\lim_{\substack{\theta \rightarrow 0 \\ \text{also } 4\theta \rightarrow 0}} \frac{\sin 4\theta}{4\theta} \right] \cdot \left[\lim_{\substack{\theta \rightarrow 0 \\ \text{also } 8\theta \rightarrow 0}} \frac{\sin(8\theta)}{8\theta} \right] = 32 \cdot 1 \cdot 1 \\ &= \boxed{32} \end{aligned}$$

$$\lim_{x \rightarrow 0} \frac{\tan(5x)}{\tan(6x)} = \lim_{x \rightarrow 0} \frac{\sin(5x)}{\cos(5x)} \cdot \frac{1}{\frac{\sin(6x)}{\cos(6x)}} =$$

$$= \lim_{x \rightarrow 0} \frac{\sin(5x)}{\sin(6x)} \cdot \frac{\cos(6x)}{\cos(5x)} = \text{direct substitution would give } \frac{0}{0} \cdot \frac{1}{1} = \frac{0}{0}$$

But divide top and bottom by x :

$$= \lim_{x \rightarrow 0} \left\{ \left[\frac{\sin(5x)}{x} \cdot \frac{x}{\sin(6x)} \right] \cdot \frac{\cos(6x)}{\cos(5x)} \right\}$$

= as before we re-adjust the coefficients:

$$= \lim_{x \rightarrow 0} \left\{ \left[\frac{\sin(5x)}{5x} \cdot \frac{6x}{\sin(6x)} \right] \cdot \frac{5}{6} \cdot \frac{\cos(6x)}{\cos(5x)} \right\} =$$

$$= \frac{5}{6} \cdot \left[\lim_{x \rightarrow 0} \frac{\sin(5x)}{5x} \right] \left[\lim_{x \rightarrow 0} \frac{6x}{\sin(6x)} \right] \cdot \lim_{x \rightarrow 0} \frac{\cos(6x)}{\cos(5x)} = \boxed{\frac{5}{6}}$$

Example 4: (Online Homework HW10, # 10)

Evaluate $\lim_{x \rightarrow 0} \frac{\tan(5x)}{\tan(6x)}$.

Example 5: (Neuhauser, Example 3(c), p. 118)

Evaluate $\lim_{x \rightarrow 0} \frac{\sec x - 1}{x \sec x}$.

$$\lim_{x \rightarrow 0} \frac{\sec x - 1}{x \sec x} = \lim_{x \rightarrow 0} \frac{\frac{1}{\cos x} - 1}{x \cdot \frac{1}{\cos x}} =$$

$$= \lim_{x \rightarrow 0} \frac{\frac{1 - \cos x}{\cos x}}{\frac{x}{\cos x}} = \lim_{x \rightarrow 0} \frac{1 - \cos x}{x} = 0$$

by the fundamental limit we showed earlier.

$$\lim_{x \rightarrow \pi/4} \frac{3(\sin x - \cos x)}{5 \cos(2x)} = \frac{3 \left[\sin(\pi/4) - \cos(\pi/4) \right]}{5 \cos(2 \cdot \frac{\pi}{4})}$$

$$= \frac{3 \left[\frac{\sqrt{2}}{2} - \frac{\sqrt{2}}{2} \right]}{5 \cos(\pi/2)} = \frac{0}{0}$$

↑ substitution theorem
since trig functions are continuous

What do we do? Try double angle formula

$$\lim_{x \rightarrow \pi/4} \frac{3(\sin x - \cos x)}{5[\cos^2 x - \sin^2 x]} = \lim_{x \rightarrow \pi/4} \frac{3(\sin x - \cos x)}{5[\cos x - \sin x] \cdot [\cos x + \sin x]}$$

↑ can factor it!

Simplify (careful to the sign!)

$$= \lim_{x \rightarrow \frac{\pi}{4}} \frac{-3}{5[\cos x + \sin x]} = \frac{-3}{5 \left(\frac{\sqrt{2}}{2} + \frac{\sqrt{2}}{2} \right)} = -\frac{3}{5\sqrt{2}}$$

$$\approx -0.424264$$

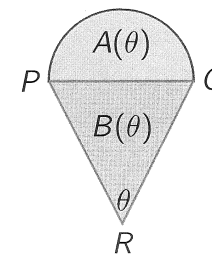
Example 6: (Online Homework HW10, # 13)

Evaluate $\lim_{x \rightarrow \pi/4} \frac{3(\sin x - \cos x)}{5 \cos(2x)}$.

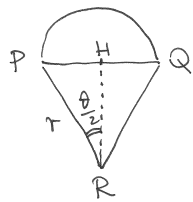
Example 7: (Online Homework HW10, # 14)

A semicircle with diameter PQ sits on an isosceles triangle PQR to form a region shaped like an ice cream cone, as shown in the figure. If $A(\theta)$ is the area of the semicircle and $B(\theta)$ is the area of the triangle, find

$$\lim_{\theta \rightarrow 0^+} \frac{A(\theta)}{B(\theta)}$$



We need the height and base of the triangle and the radius of the circle:



Use right-triangle trigonometry

$$\overline{RH} = r \cos(\theta/2)$$

$$\overline{PH} = r \sin(\theta/2)$$

$$\text{hence } PQ = 2r \sin(\theta/2)$$

Area of triangle:

$$\widehat{PRQ} = B(\theta) = \frac{1}{2} \overline{PQ} \cdot \overline{RH} = \frac{1}{2} [2r \sin(\theta/2)] [r \cos(\theta/2)]$$

Area semicircle:

$$A(\theta) = \frac{1}{2} \pi (\overline{PH})^2 = \frac{1}{2} \pi r^2 \sin^2(\theta/2)$$

$$\text{Hence } \frac{A(\theta)}{B(\theta)} = \frac{\frac{1}{2} \pi r^2 \sin^2(\theta/2)}{r^2 \sin(\theta/2) \cos(\theta/2)} =$$

$$= \frac{1}{2} \pi \cdot \frac{\sin(\theta/2)}{\cos(\theta/2)} = \frac{1}{2} \pi \tan(\theta/2)$$

$$\text{Hence } \lim_{\theta \rightarrow 0} \frac{A(\theta)}{B(\theta)} = \lim_{\theta \rightarrow 0} \frac{1}{2} \pi \tan(\theta/2) = 0$$

as \tan is a continuous function and

$$\tan(0) = 0$$

Trigonometric and Exponential Functions

- We will sometimes use the double angle formulas

$$\begin{aligned} \cos(2\alpha) &= \cos^2 \alpha - \sin^2 \alpha & \sin(2\alpha) &= 2 \sin \alpha \cos \alpha \\ &= 2 \cos^2 \alpha - 1 & \text{and} & \\ &= 1 - 2 \sin^2 \alpha \end{aligned}$$

which are special cases of the following addition formulas

$$\cos(\alpha + \beta) = \cos \alpha \cos \beta - \sin \alpha \sin \beta$$

$$\sin(\alpha + \beta) = \sin \alpha \cos \beta + \cos \alpha \sin \beta.$$

- What about $\sin(\alpha/2)$ and $\cos(\alpha/2)$? With some work

$$\cos(\alpha/2) = \pm \sqrt{\frac{1 + \cos \alpha}{2}} \quad \sin(\alpha/2) = \pm \sqrt{\frac{1 - \cos \alpha}{2}}$$

(the sign (+ or -) depends on the quadrant in which $\frac{\alpha}{2}$ lies.)

- Is there a 'simple' way of remembering the above formulas?

Euler's Formula

Euler's formula states that, for any real number x ,

$$e^{ix} = \cos x + i \sin x,$$

where i is the imaginary unit ($i^2 = -1$).

- For any α and β , using Euler's formula, we have

$$\begin{aligned} \cos(\alpha + \beta) + i \sin(\alpha + \beta) &= e^{i(\alpha + \beta)} \\ &= e^{i\alpha} \cdot e^{i\beta} \\ &= (\cos \alpha + i \sin \alpha) \cdot (\cos \beta + i \sin \beta) \\ &= (\cos \alpha \cos \beta + i^2 \sin \alpha \sin \beta) \\ &\quad + i(\sin \alpha \cos \beta + \cos \alpha \sin \beta). \end{aligned}$$

- Thus, by comparing the terms, we obtain

$$\cos(\alpha + \beta) = \cos \alpha \cos \beta - \sin \alpha \sin \beta$$

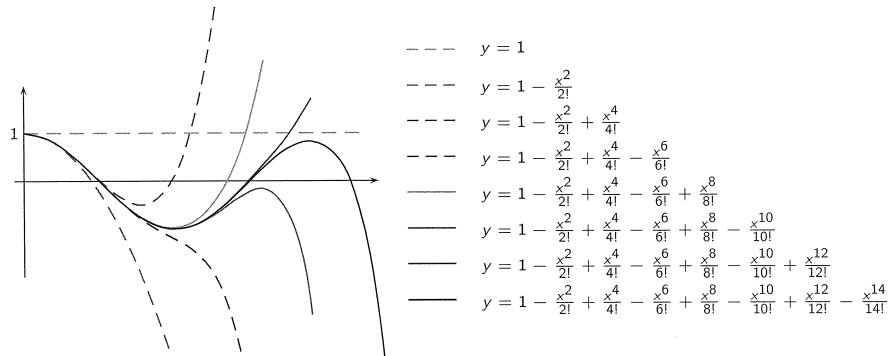
$$\sin(\alpha + \beta) = \sin \alpha \cos \beta + \cos \alpha \sin \beta.$$

Approximating $\cos x$

Consider the graph of the polynomial

$$T_{2n}(x) = 1 - \frac{x^2}{2!} + \frac{x^4}{4!} - \dots + (-1)^{n-1} \frac{x^{2(n-1)}}{(2n-2)!} + (-1)^n \frac{x^{2n}}{(2n)!}.$$

As n increases, the graph of $T_{2n}(x)$ appears to approach the one of $\cos x$. This suggests that we can approximate $\cos x$ with $T_{2n}(x)$ as $n \rightarrow \infty$.



17/20

<http://www.ms.uky.edu/~ma137>

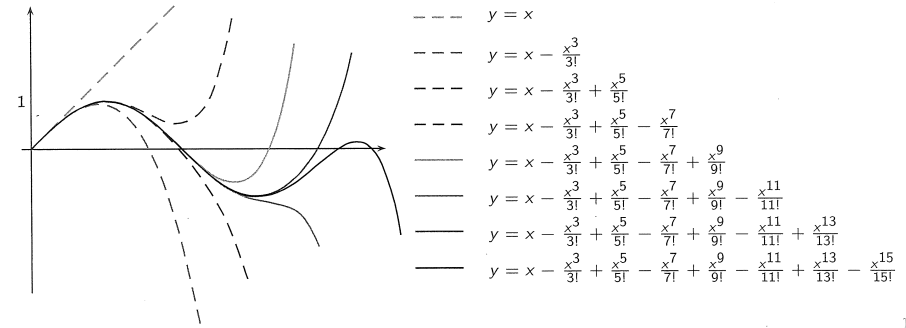
Lecture 16

Approximating $\sin x$

Consider the graph of the polynomial

$$T_{2n+1}(x) = x - \frac{x^3}{3!} + \frac{x^5}{5!} - \dots + (-1)^{n-1} \frac{x^{2n-1}}{(2n-1)!} + (-1)^n \frac{x^{2n+1}}{(2n+1)!}.$$

As n increases, the graph of $T_{2n+1}(x)$ appears to approach the one of $\sin x$. This suggests that we can approximate $\sin x$ with $T_{2n+1}(x)$ as $n \rightarrow \infty$.



18/20

<http://www.ms.uky.edu/~ma137>

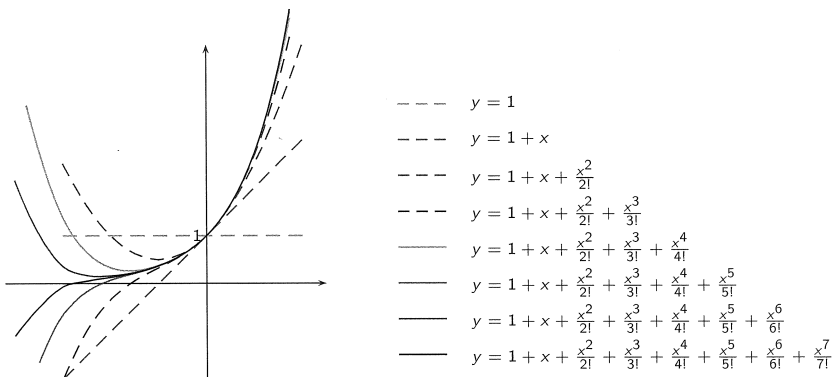
Lecture 16

Approximating e^x

Consider the graph of the polynomial

$$T_n(x) = 1 + x + \frac{x^2}{2!} + \frac{x^3}{3!} + \frac{x^4}{4!} + \dots + \frac{x^{n-1}}{(n-1)!} + \frac{x^n}{n!}.$$

As n increases, the graph of $T_n(x)$ appears to approach the one of e^x . This suggests that we can approximate e^x with $T_n(x)$ as $n \rightarrow \infty$.



19/20

<http://www.ms.uky.edu/~ma137>

Lecture 16

Idea of Why Euler's Formula Works

To justify Euler's formula, we use the polynomial approximations for e^x , $\cos x$ and $\sin x$ that we just discussed. We start by approximating e^{ix} :

$$\begin{aligned}
 e^{ix} &= 1 + ix + \frac{(ix)^2}{2!} + \frac{(ix)^3}{3!} + \frac{(ix)^4}{4!} + \frac{(ix)^5}{5!} + \frac{(ix)^6}{6!} + \frac{(ix)^7}{7!} + \frac{(ix)^8}{8!} + \dots \\
 &= 1 + ix - \frac{x^2}{2!} - \frac{ix^3}{3!} + \frac{x^4}{4!} + \frac{ix^5}{5!} - \frac{x^6}{6!} - \frac{ix^7}{7!} + \frac{x^8}{8!} + \dots \\
 &= \left(1 - \frac{x^2}{2!} + \frac{x^4}{4!} - \frac{x^6}{6!} + \frac{x^8}{8!} + \dots\right) + i \left(x - \frac{x^3}{3!} + \frac{x^5}{5!} - \frac{x^7}{7!} + \dots\right) \\
 &= \cos x + i \sin x
 \end{aligned}$$

Curiosity: From Euler's formula with $x = \pi$ we obtain

$$e^{i\pi} + 1 = 0$$

which involves five interesting math values in one short equation.

<http://www.ms.uky.edu/~ma137>

Lecture 16

20/20