

# Math 213 - Change of Variables, Part I

Peter A. Perry

University of Kentucky

November 1, 2019

# Reminders

- Homework C4 on section 15.8 (triple integrals in spherical coordinates) is due tonight

# Unit III: Multiple Integrals, Vector Fields

Double Integrals in Polar Coordinates

Triple Integrals (Part I)

Triple Integrals (Part II)

Triple Integrals in Cylindrical Coordinates

Triple Integrals in Spherical Coordinates

Change of Variables, Part I

Change of Variables, Part II

Vector Fields

Line Integrals (Scalar functions)

Line Integrals (Vector functions)

Exam III Review

# Goals of the Day

- Understand what a transformation  $T$  between two regions in the plane is
- Understand how to compute the *Jacobian Matrix* and *Jacobian determinant* of a transformation and understand what the Jacobian determinant measures
- Understand how to compute double integrals using the change of variables formula

# Preview: Calculus I versus Calculus III

If  $x = g(u)$  maps  $[c, d]$  to  $[a, b]$ , then

$$\int_a^b f(x) dx = \int_c^d f(g(u)) g'(u) du$$

In other words,

$$\int_a^b f(x) dx = \int_c^d f(x(u)) \frac{dx}{du} du$$

---

If  $x = g(u, v)$ ,  $y = h(u, v)$ , and if the region  $S$  in the  $uv$  plane is mapped to the region  $R$  in the  $xy$  plane, then

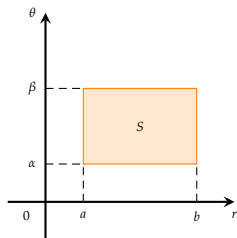
$$\iint_R f(x, y) dA = \iint_S f(x(u, v), y(u, v)) J(u, v) du dv$$

The *Jacobian determinant*

$$J(u, v) = \left| \frac{\partial(x, y)}{\partial(u, v)} \right|$$

measures how areas change under the map  $(u, v) \mapsto (x, y)$ .

# Transformations



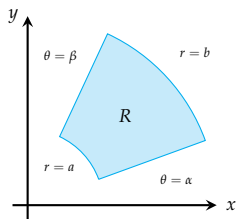
The polar coordinate map

$$x = r \cos \theta, \quad y = r \sin \theta$$

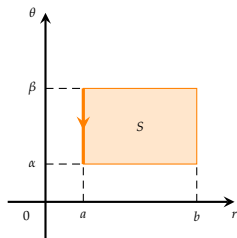
defines a transformation  $T : S \rightarrow R$

Before, we called  $R$  a *polar rectangle*

Here are the corresponding sides of the rectangle in the  $r\theta$  plane and the polar rectangle in the  $xy$  plane:



# Transformations



The polar coordinate map

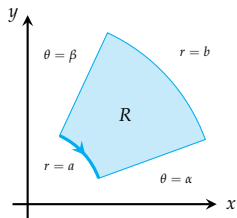
$$x = r \cos \theta, \quad y = r \sin \theta$$

defines a transformation  $T : S \rightarrow R$

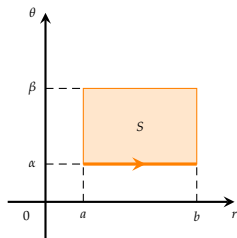
Before, we called  $R$  a *polar rectangle*

Here are the corresponding sides of the rectangle in the  $r\theta$  plane and the polar rectangle in the  $xy$  plane:

- The line  $r = a$



# Transformations



The polar coordinate map

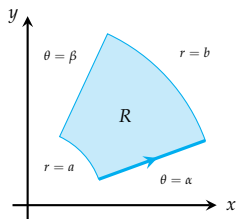
$$x = r \cos \theta, \quad y = r \sin \theta$$

defines a transformation  $T : S \rightarrow R$

Before, we called  $R$  a *polar rectangle*

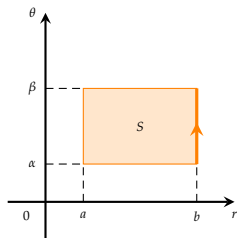
Here are the corresponding sides of the rectangle in the  $r\theta$  plane and the polar rectangle in the  $xy$  plane:

- The line  $r = a$
- The line  $\theta = \alpha$





# Transformations



The polar coordinate map

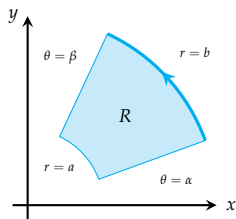
$$x = r \cos \theta, \quad y = r \sin \theta$$

defines a transformation  $T : S \rightarrow R$

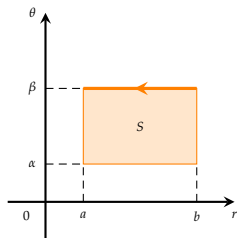
Before, we called  $R$  a *polar rectangle*

Here are the corresponding sides of the rectangle in the  $r\theta$  plane and the polar rectangle in the  $xy$  plane:

- The line  $r = a$
- The line  $\theta = \alpha$
- The line  $r = b$



# Transformations



The polar coordinate map

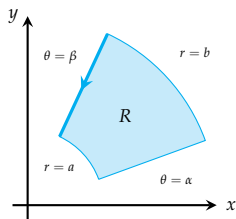
$$x = r \cos \theta, \quad y = r \sin \theta$$

defines a transformation  $T : S \rightarrow R$

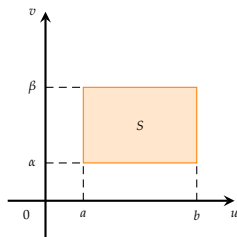
Before, we called  $R$  a *polar rectangle*

Here are the corresponding sides of the rectangle in the  $r\theta$  plane and the polar rectangle in the  $xy$  plane:

- The line  $r = a$
- The line  $\theta = \alpha$
- The line  $r = b$
- The line  $\theta = \beta$



# Transformations



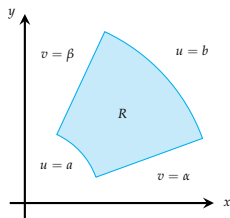
The polar coordinate map

$$x = u \cos v, \quad y = u \sin v$$

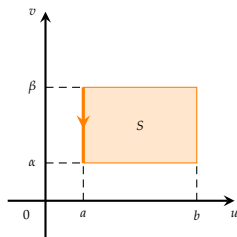
defines a transformation  $T : S \rightarrow R$

Before, we called  $R$  a *polar rectangle*

Here are the corresponding sides of the rectangle in the  $u\theta$  plane and the polar rectangle in the  $xy$  plane:



# Transformations



The polar coordinate map

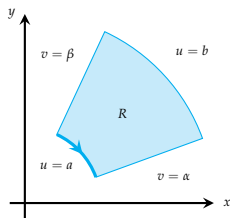
$$x = u \cos v, \quad y = u \sin v$$

defines a transformation  $T : S \rightarrow R$

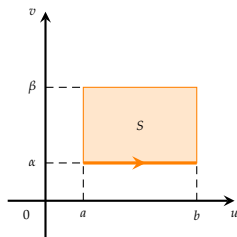
Before, we called  $R$  a *polar rectangle*

Here are the corresponding sides of the rectangle in the  $u\theta$  plane and the polar rectangle in the  $xy$  plane:

- The line  $u = a$



# Transformations



The polar coordinate map

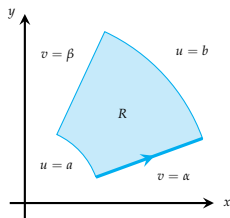
$$x = u \cos v, \quad y = u \sin v$$

defines a transformation  $T : S \rightarrow R$

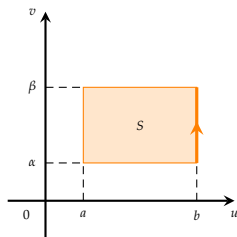
Before, we called  $R$  a *polar rectangle*

Here are the corresponding sides of the rectangle in the  $u\theta$  plane and the polar rectangle in the  $xy$  plane:

- The line  $u = a$
- The line  $v = \alpha$



# Transformations



The polar coordinate map

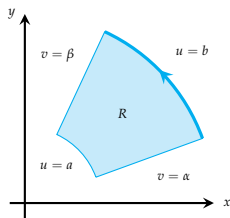
$$x = u \cos v, \quad y = u \sin v$$

defines a transformation  $T : S \rightarrow R$

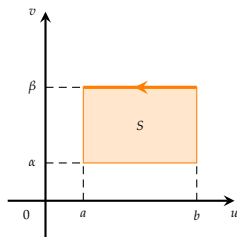
Before, we called  $R$  a *polar rectangle*

Here are the corresponding sides of the rectangle in the  $u\theta$  plane and the polar rectangle in the  $xy$  plane:

- The line  $u = a$
- The line  $v = \alpha$
- The line  $u = b$



# Transformations



The polar coordinate map

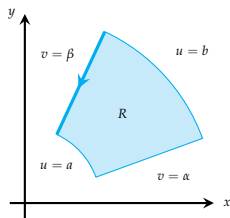
$$x = u \cos v, \quad y = u \sin v$$

defines a transformation  $T : S \rightarrow R$

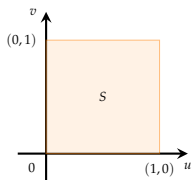
Before, we called  $R$  a *polar rectangle*

Here are the corresponding sides of the rectangle in the  $u\theta$  plane and the polar rectangle in the  $xy$  plane:

- The line  $u = a$
- The line  $v = \alpha$
- The line  $u = b$
- The line  $v = \beta$



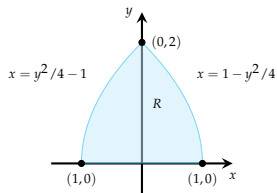
# Transformations



The equations

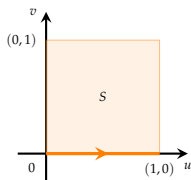
$$x = u^2 - v^2, \quad y = 2uv$$

defines a transformation  $T : S \rightarrow R$





# Transformations

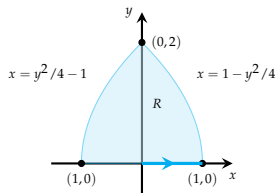


The equations

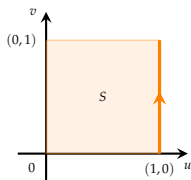
$$x = u^2 - v^2, \quad y = 2uv$$

defines a transformation  $T : S \rightarrow R$

- $v = 0, 0 \leq u \leq 1$  maps to  $0 \leq x \leq 1, y = 0$



# Transformations

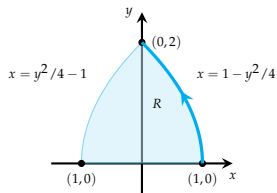


The equations

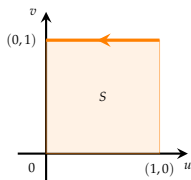
$$x = u^2 - v^2, \quad y = 2uv$$

defines a transformation  $T : S \rightarrow R$

- $v = 0, 0 \leq u \leq 1$  maps to  $0 \leq x \leq 1, y = 0$
- $u = 1, 0 \leq v \leq 1$  maps to the parametric curve  $x = 1 - v^2, y = 2v$



# Transformations

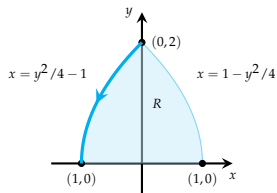


The equations

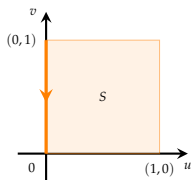
$$x = u^2 - v^2, \quad y = 2uv$$

defines a transformation  $T : S \rightarrow R$

- $v = 0, 0 \leq u \leq 1$  maps to  $0 \leq x \leq 1, y = 0$
- $u = 1, 0 \leq v \leq 1$  maps to the parametric curve  $x = 1 - v^2, y = 2v$
- $v = 1, 0 \leq u \leq 1$  maps to the parametric curve  $x = u^2 - 1, y = 2u$



# Transformations

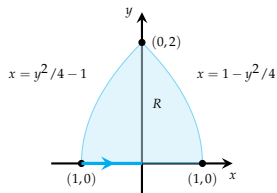


The equations

$$x = u^2 - v^2, \quad y = 2uv$$

defines a transformation  $T : S \rightarrow R$

- $v = 0, 0 \leq u \leq 1$  maps to  $0 \leq x \leq 1, y = 0$
- $u = 1, 0 \leq v \leq 1$  maps to the parametric curve  $x = 1 - v^2, y = 2v$
- $v = 1, 0 \leq u \leq 1$  maps to the parametric curve  $x = u^2 - 1, y = 2u$
- $u = 0, 0 \leq v \leq 1$  maps to  $-1 \leq x \leq 0, y = 0$



# Transformations

- ① Find the image of

$$S = \{(u, v) : 0 \leq u \leq 3, 0 \leq v \leq 2\}$$

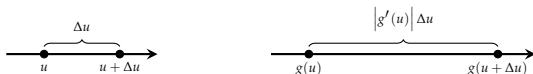
under the transformation  $x = 2u + 3v, y = u - v$

- ② Find the image of the disc  $u^2 + v^2 \leq 1$  under the transformation  $x = au, y = bv$

# The Jacobian

In *one variable calculus*, the way a transformation  $x = g(u)$  changes lengths of intervals is measured by  $g'(u)$ :

$$\Delta x = g'(u)\Delta u$$



In *two variable calculus*, the way a transformation

$$x = g(u, v), \quad y = h(u, v)$$

changes areas is measured by the *Jacobian determinant*

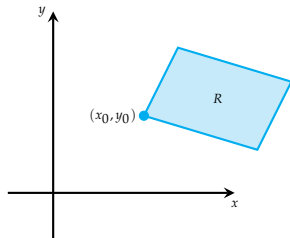
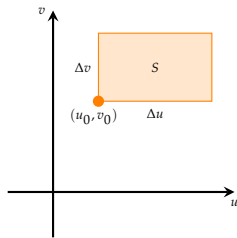
$$J(u, v) = \begin{vmatrix} \partial x / \partial u & \partial x / \partial v \\ \partial y / \partial u & \partial y / \partial v \end{vmatrix}, \quad \Delta A = |J(u, v)| \Delta u \Delta v$$

We'll now see why this is the case...

# The Jacobian

A transformation  $x = g(u, v)$ ,  $y = h(u, v)$  maps a small rectangle  $S$  into a distorted rectangle  $R$  through the rule

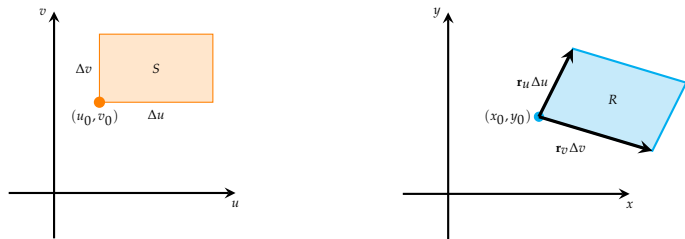
$$\mathbf{r}(u, v) = g(u, v)\mathbf{i} + h(u, v)\mathbf{j}$$



# The Jacobian

A transformation  $x = g(u, v)$ ,  $y = h(u, v)$  maps a small rectangle  $S$  into a distorted rectangle  $R$  through the rule

$$\mathbf{r}(u, v) = g(u, v)\mathbf{i} + h(u, v)\mathbf{j}$$

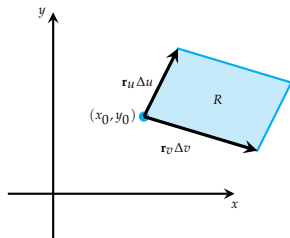
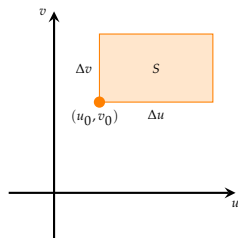


$R$  has approximate area  $|\mathbf{r}_u \times \mathbf{r}_v| \Delta u \Delta v$  where

$$\mathbf{r}_u = \frac{\partial x}{\partial u} \mathbf{i} + \frac{\partial y}{\partial u} \mathbf{j}, \quad \mathbf{r}_v = \frac{\partial x}{\partial v} \mathbf{i} + \frac{\partial y}{\partial v} \mathbf{j}$$



# The Jacobian



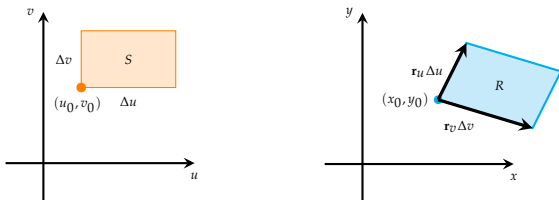
$R$  has approximate area  $|\mathbf{r}_u \times \mathbf{r}_v| \Delta u \Delta v$  where

$$\mathbf{r}_u = \frac{\partial x}{\partial u} \mathbf{i} + \frac{\partial y}{\partial u} \mathbf{j}, \quad \mathbf{r}_v = \frac{\partial x}{\partial v} \mathbf{i} + \frac{\partial y}{\partial v} \mathbf{j}$$

Compute

$$\mathbf{r}_u \times \mathbf{r}_v = \begin{vmatrix} \mathbf{i} & \mathbf{j} & \mathbf{k} \\ \frac{\partial x}{\partial u} & \frac{\partial y}{\partial u} & 0 \\ \frac{\partial x}{\partial v} & \frac{\partial y}{\partial v} & 0 \end{vmatrix} = \frac{\partial x}{\partial u} \frac{\partial y}{\partial v} - \frac{\partial x}{\partial v} \frac{\partial y}{\partial u}$$

# The Jacobian



The area of  $R$  is approximately

$$dA \simeq \left| \frac{\partial(x, y)}{\partial(u, v)} \right| \Delta u \Delta v$$

where

$$\frac{\partial(x, y)}{\partial(u, v)} = \begin{vmatrix} \partial x / \partial u & \partial x / \partial v \\ \partial y / \partial u & \partial y / \partial v \end{vmatrix}$$

is the *Jacobian determinant* of the transformation

# The Jacobian

Find the Jacobian determinant of the following transformations.

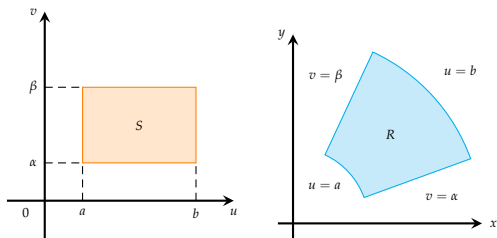
①  $x = 2u + 3v, y = u - v$

②  $x = au, y = bv$

③  $x = u^2 - v^2, y = 2uv$

# Area Change in Polar Coordinates

Consider the transformation  $x = u \cos v$ ,  $y = u \sin v$



$$\begin{pmatrix} \partial x / \partial u & \partial x / \partial v \\ \partial y / \partial u & \partial y / \partial v \end{pmatrix} = \begin{pmatrix} \cos(v) & -u \sin(v) \\ \sin(v) & u \cos(v) \end{pmatrix}$$

so

$$J(u, v) = \begin{vmatrix} \cos(v) & \sin(v) \\ -u \sin(v) & u \cos(v) \end{vmatrix} = u$$

# Notation

The *Jacobian Determinant* of a transformation  $x = g(u, v)$ ,  $y = h(u, v)$  is denoted

$$\frac{\partial(x, y)}{\partial(u, v)} = \begin{vmatrix} \frac{\partial x}{\partial u} & \frac{\partial x}{\partial v} \\ \frac{\partial y}{\partial u} & \frac{\partial y}{\partial v} \end{vmatrix}$$

The notation

$$\left| \frac{\partial(x, y)}{\partial(u, v)} \right|$$

denotes the *absolute value* of this determinant.

# Change of Variables Formula

If the transformation  $x = g(u, v)$ ,  $y = h(u, v)$  maps a region  $S$  in the  $uv$ -plane to a region  $R$  in the  $xy$  plane:

$$\begin{aligned}\iint_R f(x, y) dA &\simeq \sum_{i=1}^n \sum_{j=1}^n f(x_i, y_j) \Delta A \\ &\simeq \sum_{i=1}^n \sum_{j=1}^n f(g(u_i, v_j), h(u_i, v_j)) \left| \frac{\partial(x, y)}{\partial(u, v)} \right| \Delta u \Delta v \\ &\iint_S f(g(u, v), h(u, v)) \left| \frac{\partial(x, y)}{\partial(u, v)} \right| du dv\end{aligned}$$

**Change of Variables in a Double Integral** If  $T$  is a one-to-one transformation with nonzero Jacobian and  $T : S \rightarrow R$ , then

$$\iint_R f(x, y) dA = \iint_S f(x(u, v), y(u, v)) \left| \frac{\partial(x, y)}{\partial(u, v)} \right| du dv$$

# Change of Variables Formula

**Change of Variables in a Double Integral** If  $T$  is a one-to-one transformation with nonzero Jacobian and  $T : S \rightarrow R$ , then

$$\iint_R f(x, y) dA = \iint_S f(x(u, v), y(u, v)) \left| \frac{\partial(x, y)}{\partial(u, v)} \right| du dv$$

- 1 Use the transformation  $x = 2u + v$ ,  $y = u + 2v$  to find  $\iint_R (x - 3y) dA$  if  $R$  is the triangular region with vertices  $(0, 0)$ ,  $(2, 1)$  and  $(1, 2)$
- 2 Find  $\iint_R (x + y)e^{x^2 - y^2} dA$  if  $R$  is the rectangle enclosed by  $x - y = 0$ ,  $x - y = 2$ ,  $x + y = 0$ , and  $x + y = 3$ .