

Math 213 - Line Integrals, Part II

Peter A. Perry

University of Kentucky

November 11, 2019

Reminders

- Exam III is this Wednesday, November 13, 5:00-7:00 PM
- The Review Session for Exam III is tonight, 6:00-8:00 PM in room KAS 213

Unit III: Multiple Integrals, Vector Fields

Double Integrals in Polar Coordinates

Triple Integrals (Part I)

Triple Integrals (Part II)

Triple Integrals in Cylindrical Coordinates

Triple Integrals in Spherical Coordinates

Change of Variables, Part I

Change of Variables, Part II

Vector Fields

Line Integrals (Scalar functions)

Line Integrals (Vector functions)

Exam III Review

Goals of the Day

- Know how to compute line integrals of a vector function in the plane and in space

Where Are We?

We've talked about line integrals of *scalar functions* over plane and space curves. Today we'll talk about line integrals of *vector functions* over plane and space curves. If C is a curve in the plane or in space, we've already seen how to compute:

- $\int_C f(x, y) ds$, the integral of a scalar function over a plane curve C
- $\int_C f(x, y, z) ds$, the integral of a scalar function over a space curve C

Today we'll discuss:

- $\int_C \mathbf{F} \cdot d\mathbf{r}$, the integral of a vector function $\mathbf{F}(x, y)$ over a plane curve C
- $\int_C \mathbf{F} \cdot d\mathbf{r}$, the integral of a vector function $\mathbf{F}(x, y, z)$ over a space curve C

Remember Space Curves?

A *space curve* is given by

$$\mathbf{r}(t) = x(t)\mathbf{i} + y(t)\mathbf{j} + z(t)\mathbf{k}$$

The *tangent vector* to a space curve is

$$\mathbf{r}'(t) = x'(t)\mathbf{i} + y'(t)\mathbf{j} + z'(t)\mathbf{k}$$

Recall that $\mathbf{r}'(t)$ is the velocity, and $|\mathbf{r}'(t)|$ is the speed.

The *unit tangent vector* is

$$\mathbf{T}(t) = \frac{\mathbf{r}'(t)}{|\mathbf{r}'(t)|}.$$

Find the tangent vector and unit tangent vector to the curve

$$\mathbf{r}(t) = \cos(t)\mathbf{i} + \sin(t)\mathbf{j} + t\mathbf{k}$$

for $t = 0$, $t = \pi/2$, and $t = \pi$.

Recall that the work done by a constant force \mathbf{F} moving an object through a displacement \mathbf{D} is

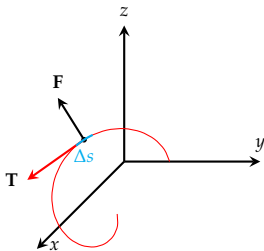
$$W = \mathbf{F} \cdot \mathbf{D}$$

What if \mathbf{F} and the displacement \mathbf{D} vary as the force acts through a curve C ?

Write $\mathbf{D} = \mathbf{T}\Delta s$ where \mathbf{T} is the tangent vector and Δs is arc length.

Then

$$\begin{aligned} W &\simeq \sum_{i=1}^n \mathbf{F}(x_i^*, y_i^*, z_i^*) \cdot \mathbf{T}_i \Delta s \\ &\rightarrow \int_C \mathbf{F} \cdot \mathbf{T} ds \end{aligned}$$



How Do You Compute It?

The work done by a variable force \mathbf{F} moving a particle along a curve C is

$$W = \int_C \mathbf{F} \cdot \mathbf{T} \, ds.$$

If C is parameterized by $\mathbf{r}(t) = x(t)\mathbf{i} + y(t)\mathbf{j} + z(t)\mathbf{k}$ for $a \leq t \leq b$:

$$\mathbf{T} = \frac{\mathbf{r}'(t)}{|\mathbf{r}'(t)|}$$

and

$$ds = |\mathbf{r}'(t)| \, dt$$

So

$$\begin{aligned} \int_C \mathbf{F} \cdot \mathbf{T} \, ds &= \int_a^b \mathbf{F}(x(t), y(t), z(t)) \cdot \frac{\mathbf{r}'(t)}{|\mathbf{r}'(t)|} |\mathbf{r}'(t)| \, dt \\ &= \int_C \mathbf{F}(x(t), y(t), z(t)) \cdot \mathbf{r}'(t) \, dt \end{aligned}$$

This line integral is sometimes written

$$\int_C \mathbf{F} \cdot d\mathbf{r}$$

for short

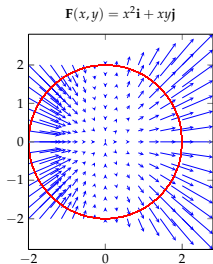
Now You Try It

$$\int_C \mathbf{F} \cdot d\mathbf{r} = \int_a^b \mathbf{F}(\mathbf{r}(t)) \cdot \mathbf{r}'(t) dt$$

Find $\int_C \mathbf{F} \cdot d\mathbf{r}$ if:

- 1 $\mathbf{F}(x, y, z) = x\mathbf{i} + y\mathbf{j} + z\mathbf{k}$ and $\mathbf{r}(t) = t^2\mathbf{i} + t^3\mathbf{j} - 2t\mathbf{k}$, $0 \leq t \leq 2$
- 2 $\mathbf{F}(x, y, z) = yze^x\mathbf{i} + zxe^y\mathbf{j} + xye^z\mathbf{k}$ and $\mathbf{r}(t) = \sin t\mathbf{i} + \cos t\mathbf{j} + \tan t\mathbf{k}$, $0 \leq t \leq \pi/4$

Now You Try It



Find the work done by the force field

$$\mathbf{F}(x, y) = x^2\mathbf{i} + xy\mathbf{j}$$

on a particle that moves around the circle

$$x^2 + y^2 = 4$$

oriented in the counterclockwise direction

Real Science

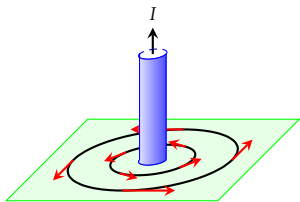
Steady current in a wire generates a magnetic field \mathbf{B} tangent to any circle that lies in the plane perpendicular to the wire centered on the wire. According to *Ampere's law*,

$$\int_C \mathbf{B} \cdot d\mathbf{r} = \mu_0 I$$

where

- I is the net current flowing through the wire
- μ_0 is a physical constant

What is the magnitude of the magnetic field at a distance r from the wire?



Summary

Arc length differential

$$ds = \sqrt{x'(t)^2 + y'(t)^2 + z'(t)^2} dt$$

Line integral with respect to arc length

$$\int_C f(x, y, z) ds = \int_a^b f(x(t), y(t), z(t)) ds$$

Line integral with respect to x, y, z

$$\int_C f(x, y, z) dx = \int_a^b f(x(t), y(t), z(t)) x'(t) dt$$

$$\int_C f(x, y, z) dy = \int_a^b f(x(t), y(t), z(t)) y'(t) dt$$

$$\int_C f(x, y, z) dz = \int_a^b f(x(t), y(t), z(t)) z'(t) dt$$

Line integral of a vector field

$$\int_C \mathbf{F} \cdot d\mathbf{r} = \int_a^b \mathbf{F}(x(t), y(t), z(t)) \cdot \mathbf{r}'(t) dt$$



Chain Rule Puzzler

If $\mathbf{F}(x, y, z)$ is a vector field and $\mathbf{r}(t) = x(t), y(t), z(t)$ is a parameterized curve, what is

$$\frac{d}{dt} [F(x(t), y(t), z(t))]$$

in terms of ∇F and $\mathbf{r}'(t)$?

Remember the Fundamental Theorem of Calculus?

What is

$$\int_a^b \frac{d}{dt} F(t) dt ?$$

Line Integral of a Gradient Vector Field

Suppose $\mathbf{F} = \nabla\phi$ for a potential function $\phi(x, y, z)$

Suppose $\mathbf{r}(t), a \leq t \leq b$ is a parameterized path C .

Is there a simple way to compute

$$\int_C \mathbf{F} \cdot d\mathbf{r}?$$