

Math 213 - Equations of Lines and Planes, II

Peter A. Perry

University of Kentucky

September 9, 2019

Reminders

- Access your WebWork account *only through Canvas!*
- Homework A3 on section 12.5 is due Wednesday
- Homework A4 on section 12.6 is due Friday
- Quiz # 2 on sections 12.3-12.4 takes place in Thursday recitation

Unit I: Geometry and Motion in Space

- 12.1 Lecture 1: Three-Dimensional Coordinate Systems
- 12.2 Lecture 2: Vectors in the Plane and in Space
- 12.3 Lecture 3: The Dot Product
- 12.4 Lecture 4: The Cross Product
- 12.5 Lecture 5: Equations of Lines and Planes, I
- 12.5 **Lecture 6: Equations of Lines and Planes, II**
- 12.6 Lecture 7: Surfaces in Space
- 13.1 Lecture 8: Vector Functions and Space Curves
- 13.2 Lecture 9: Derivatives and Integrals of Vector Functions
- Lecture 10: Exam I Review

Learning Goals

- Review dot, cross, and triple scalar products
- Review equations of lines and planes
- Sketch and visualize lines and planes
- Learn how find the distance from a point to a plane

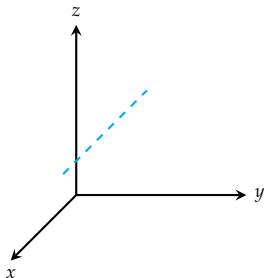


Dot Product, Cross Product, Triple Product

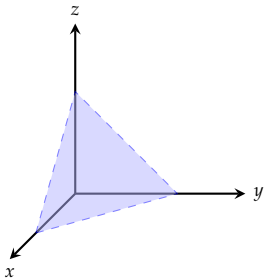
	Formula	Type	Geometry	Zero if...
Dot	$\mathbf{a} \cdot \mathbf{b}$	Scalar	Projections	\mathbf{a}, \mathbf{b} orthogonal
Cross	$\mathbf{a} \times \mathbf{b}$	Vector	Area of a Parallelogram	\mathbf{a}, \mathbf{b} parallel
Triple	$\mathbf{a} \cdot (\mathbf{b} \times \mathbf{c})$	Scalar	Volume of a Parallelepiped	$\mathbf{a}, \mathbf{b}, \mathbf{c}$ coplanar



Lines and Planes



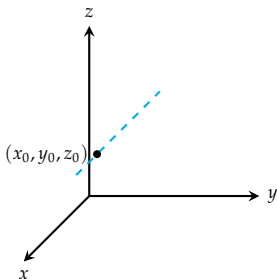
To specify the equation of a **line** L , you need:



To specify the equation of a **plane**, you need:

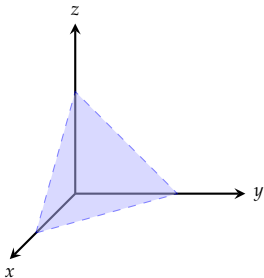


Lines and Planes



To specify the equation of a **line** L , you need:

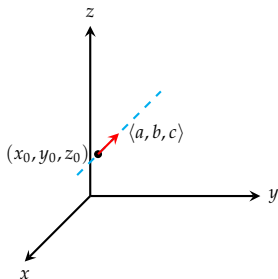
- A point (x_0, y_0, z_0) on L



To specify the equation of a **plane**, you need:

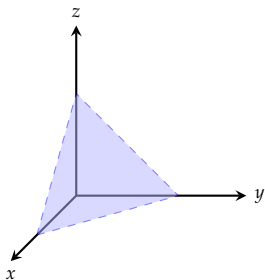


Lines and Planes



To specify the equation of a **line** L , you need:

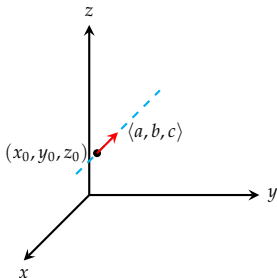
- A point (x_0, y_0, z_0) on L
- A vector $\langle a, b, c \rangle$ in the direction of L



To specify the equation of a **plane**, you need:

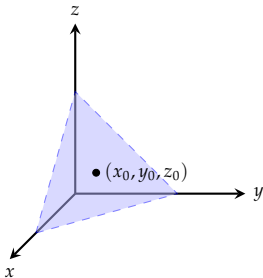


Lines and Planes



To specify the equation of a **line** L , you need:

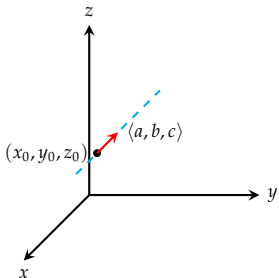
- A point (x_0, y_0, z_0) on L
- A vector $\langle a, b, c \rangle$ in the direction of L



To specify the equation of a **plane**, you need:

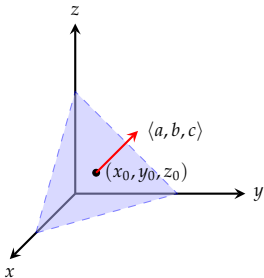
- A point (x_0, y_0, z_0) on the plane

Lines and Planes



To specify the equation of a **line** L , you need:

- A point (x_0, y_0, z_0) on L
- A vector $\langle a, b, c \rangle$ in the direction of L



To specify the equation of a **plane**, you need:

- A point (x_0, y_0, z_0) on the plane
- A vector $\mathbf{n} = \langle a, b, c \rangle$ normal to the plane

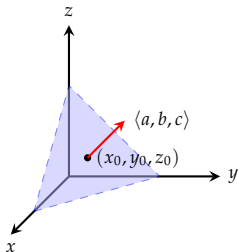
Hot Tip - Planes Made Simple

The equation of a plane is

$$a(x - x_0) + b(y - y_0) + c(z - z_0) = 0$$

or

$$ax + by + cz = d$$



Step 1. Determine $\langle a, b, c \rangle$ from geometry

Step 2. Find d by substituting in x_0, y_0, z_0

Example: Find the equation of a plane parallel to the plane

$$x - y + 2z = 0$$

through the point $(2, 2, 2)$.

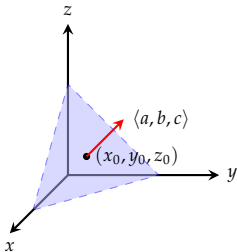
Hot Tip - Planes Made Simple

The equation of a plane is

$$a(x - x_0) + b(y - y_0) + c(z - z_0) = 0$$

or

$$ax + by + cz = d$$



Step 1. Determine $\langle a, b, c \rangle$ from geometry

Step 2. Find d by substituting in x_0, y_0, z_0

Example: Find the equation of a plane orthogonal to the line

$$(x, y, z) = (-7, 0, 0) + t(-7, 3, 3)$$

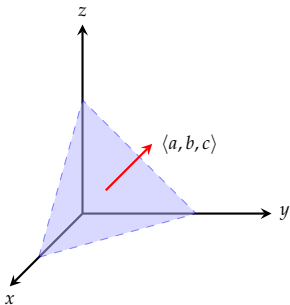
which passes through the point $(0, 0, -7)$.
Give your answer in the form $ax + by + cz = d$ where $a = 7$.



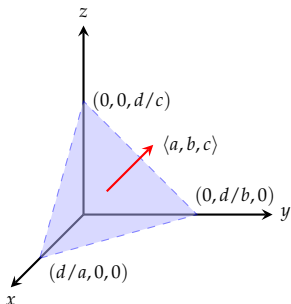
Hot Tip - Sketching Planes Made Simple

The equation of a plane is

$$ax + by + cz = d$$



Hot Tip - Sketching Planes Made Simple



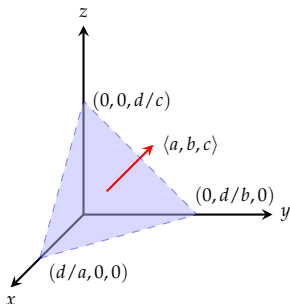
The equation of a plane is

$$ax + by + cz = d$$

To sketch the plane with this equation, you can find the x -, y -, and z -intercepts from the equation:

$$x = d/a, \quad y = d/b, \quad z = d/c$$

Hot Tip - Sketching Planes Made Simple



The equation of a plane is

$$ax + by + cz = d$$

To sketch the plane with this equation, you can find the x -, y -, and z -intercepts from the equation:

$$x = d/a, \quad y = d/b, \quad z = d/c$$

Sketch the part of the plane

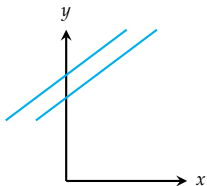
$$2x + y + 3z = 4$$

in the first octant and label the x -, y -, and z -intercepts.

Intersecting, Parallel, and Skew Lines

In two-dimensional space, two lines L_1 and L_2 can be

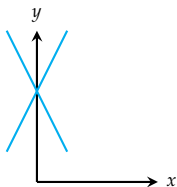
Intersecting, Parallel, and Skew Lines



In two-dimensional space, two lines L_1 and L_2 can be

- *parallel*, or

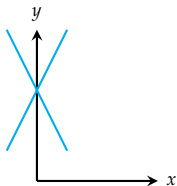
Intersecting, Parallel, and Skew Lines



In two-dimensional space, two lines L_1 and L_2 can be

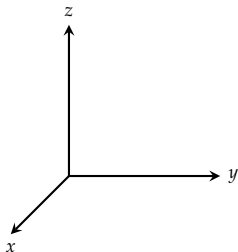
- *parallel*, or
- *intersecting*

Intersecting, Parallel, and Skew Lines



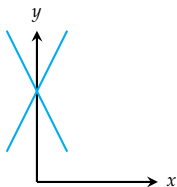
In two-dimensional space, two lines L_1 and L_2 can be

- *parallel*, or
- *intersecting*



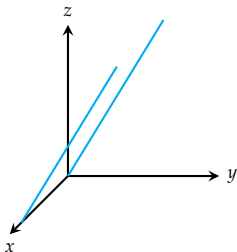
In three dimensions, two lines L_1 and L_2 can be

Intersecting, Parallel, and Skew Lines



In two-dimensional space, two lines L_1 and L_2 can be

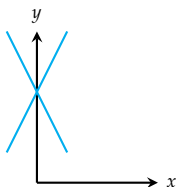
- *parallel*, or
- *intersecting*



In three dimensions, two lines L_1 and L_2 can be

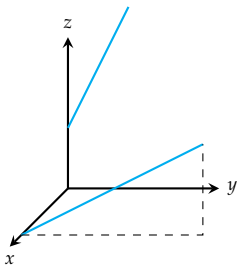
- *parallel*,

Intersecting, Parallel, and Skew Lines



In two-dimensional space, two lines L_1 and L_2 can be

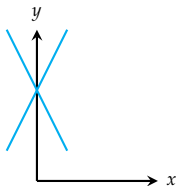
- *parallel*, or
- *intersecting*



In three dimensions, two lines L_1 and L_2 can be

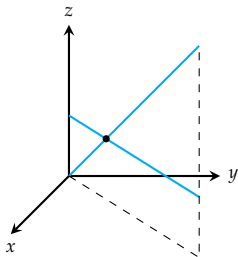
- *parallel*,
- *skew*, or

Intersecting, Parallel, and Skew Lines



In two-dimensional space, two lines L_1 and L_2 can be

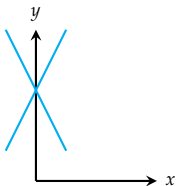
- *parallel*, or
- *intersecting*



In three dimensions, two lines L_1 and L_2 can be

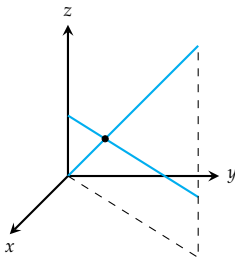
- *parallel*,
- *skew*, or
- *intersecting*

Intersecting, Parallel, and Skew Lines



In two-dimensional space, two lines L_1 and L_2 can be

- *parallel*, or
- *intersecting*



In three dimensions, two lines L_1 and L_2 can be

- *parallel*,
- *skew*, or
- *intersecting*

How do you tell which is which?

Intersecting, Parallel, and Skew Lines

$$\mathbf{r}(t) = \mathbf{r}_0(t) + t\mathbf{v}$$

- Two lines are parallel if the corresponding vectors \mathbf{v} are parallel
- If not parallel, two lines intersect if we can solve for the point of intersection
- If not parallel, and nonintersecting, they are skew

Determine whether the following pairs of lines are parallel, intersect, or are skew. If they intersect, find the points of intersection.

① $L_1 : x = 2 + s, \quad y = 3 - 2s, \quad z = 1 - 3s$

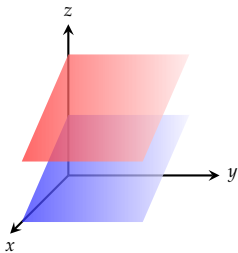
$L_2 : x = 3 + t, \quad y = -4 + 3t, \quad z = 2 - 7t$

② $L_1 : \frac{x}{1} = \frac{y-1}{-1} = \frac{z-1}{-3}, \quad L_2 : \frac{x-2}{2} = \frac{y-3}{-2} = \frac{z}{7}$

Intersecting and Parallel Planes

Two planes either

Intersecting and Parallel Planes

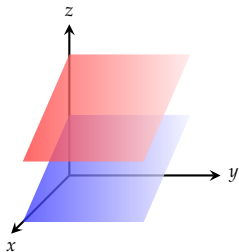


Two planes either

- are parallel (if their normal vectors are parallel), or

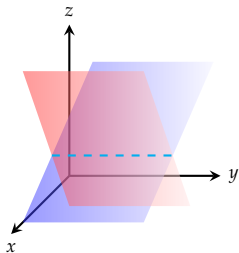


Intersecting and Parallel Planes

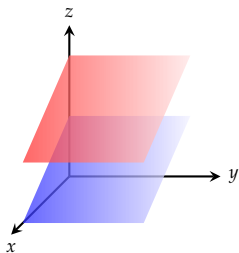


Two planes either

- are parallel (if their normal vectors are parallel), or
- intersect in a line



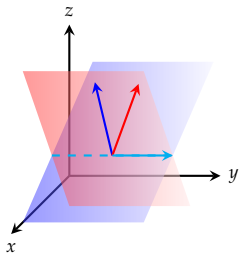
Intersecting and Parallel Planes



Two planes either

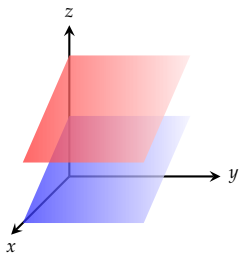
- are parallel (if their normal vectors are parallel), or
- intersect in a line

A vector pointing along that line will be perpendicular to *both* normal vectors





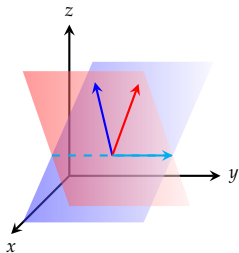
Intersecting and Parallel Planes



Two planes either

- are parallel (if their normal vectors are parallel), or
- intersect in a line

A vector pointing along that line will be perpendicular to *both* normal vectors



Find the line of intersection between the planes

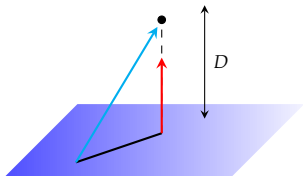
$$x + 2y + 3z = 1$$

and

$$x - y + z = 1$$

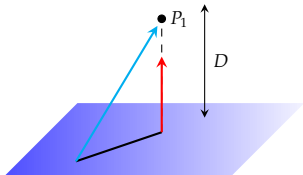
The Distance from a Point to a Plane

To find the distance D



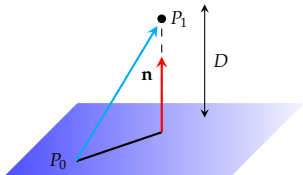
The Distance from a Point to a Plane

To find the distance D from a point P_1



The Distance from a Point to a Plane

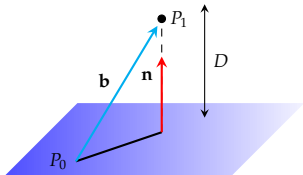
To find the distance D from a point P_1 to a plane with normal vector \mathbf{n} containing a point P_0 :



The Distance from a Point to a Plane

To find the distance D from a point P_1 to a plane with normal vector \mathbf{n} containing a point P_0 :

Let \mathbf{b} be the vector $\overrightarrow{P_0P_1}$



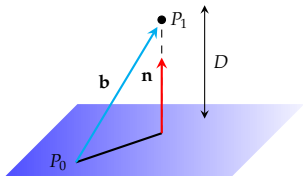
The Distance from a Point to a Plane

To find the distance D from a point P_1 to a plane with normal vector \mathbf{n} containing a point P_0 :

Let \mathbf{b} be the vector $\overrightarrow{P_0P_1}$

Then the distance D is given by $\text{comp}_{\mathbf{n}} \mathbf{b}$, or

$$D = \frac{|\mathbf{n} \cdot \mathbf{b}|}{|\mathbf{n}|}$$



The Distance from a Point to a Plane

To find the distance D from a point P_1 to a plane with normal vector \mathbf{n} containing a point P_0 :

Let \mathbf{b} be the vector $\overrightarrow{P_0P_1}$

Then the distance D is given by $\text{comp}_{\mathbf{n}} \mathbf{b}$, or

$$D = \frac{|\mathbf{n} \cdot \mathbf{b}|}{|\mathbf{n}|}$$

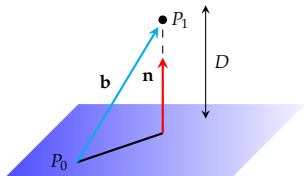
If

$$P_1 = P_1(x_1, y_1, z_1),$$

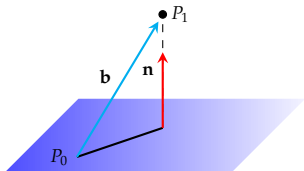
$$P_0 = P_0(x_0, y_0, z_0),$$

then

$$\mathbf{b} = (x_1 - x_0, y_1 - y_0, z_1 - z_0)$$



The Distance from a Point to a Plane



$$D = \frac{|\mathbf{n} \cdot \mathbf{b}|}{|\mathbf{n}|}$$

$$\mathbf{b} = (x_1 - x_0, y_1 - y_0, z_1 - z_0)$$

$$\mathbf{n} = \langle a, b, c \rangle$$

If the plane's equation is

$$ax + by + cz + d = 0$$

then

$$\begin{aligned} \mathbf{n} \cdot \mathbf{b} &= a(x_1 - x_0) + b(y_1 - y_0) + c(z_1 - z_0) \\ &= ax_1 + by_1 + cz_1 + d \end{aligned}$$

so

$$D = \frac{|ax_1 + by_1 + cz_1 + d|}{\sqrt{a^2 + b^2 + c^2}}.$$

Summary

- We reviewed the basic facts about the dot product $\mathbf{a} \cdot \mathbf{b}$, the cross product $\mathbf{a} \times \mathbf{b}$, and the scalar triple product $\mathbf{a} \cdot (\mathbf{b} \times \mathbf{c})$
- We reviewed how to write equations of lines and planes and ...
 - How to determine whether two lines are parallel, perpendicular, or skew
 - How to determine whether planes are parallel or intersecting
- We computed the distance from a point to a plane

Homework

- Re-read section 12.5 and continue work on webwork A3 (due Wednesday)
- Read and study section 12.6 on quadric surfaces
- Prepare for tomorrow's recitation on section 12.5