

# MA111: Contemporary mathematics

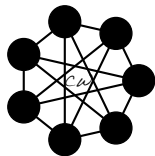
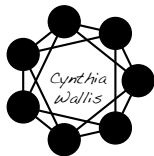
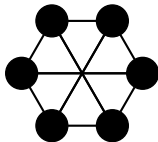
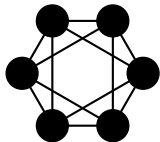
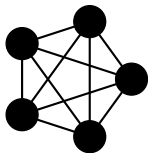
Jack Schmidt

University of Kentucky

October 19, 2012

Entrance Slip (due 5 min past the hour):

- Which of these glow puzzles is solvable?



Today we try to discover Fleury's and Hierholzer's Pillars

## Context: glow puzzle strategy

- There are 5 pillars to glow puzzle mastery
- Covered 3 of them yesterday: count how many edges touch a point
- These pillars told us whether and where to start
- After today's meditation I will recount two more pillars
- But first let us look into the light

## Activity: Meditate on the glow

- The true puzzle lies within, but a shadow lies on the paper
- Complete the four faded puzzles on the paper
- There is no success or failure, only results
- What results in a complete tracing without repeated edges?
- When do you know the tracing cannot be completed?

## Fast: 5.6 Fleury and Hierholzer

- Fleury observed that you cannot win if you have already lost.

### Theorem (Fleury)

*Erase edges as you use them. You have lost exactly when you disconnect the graph. Otherwise, you can always complete your tracing.*

- Hierholzer observed that the solution is easy

### Theorem (Hierholzer)

*Where two circles touch, switch circles.*

- You only need to use one of these to solve Glow puzzle.

## Assignment and exit slip

- Read 5.1, 5.2, 5.3, 5.5, 5.6. Skim 5.7
- Play some GlowPuzzle or [other alternatives](#) or even [Jack's first level](#)
- **Exit slip:** How do you solve Jack's glow puzzle with extra edges?

